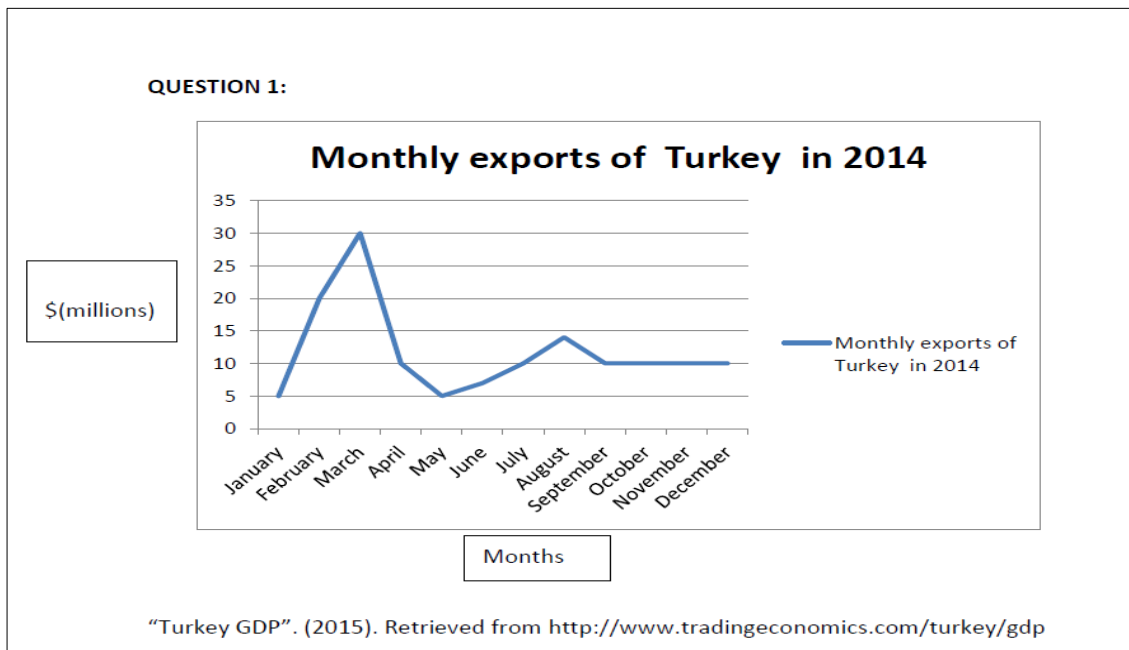




Language on pp.51-53 + table below (different degrees of change)

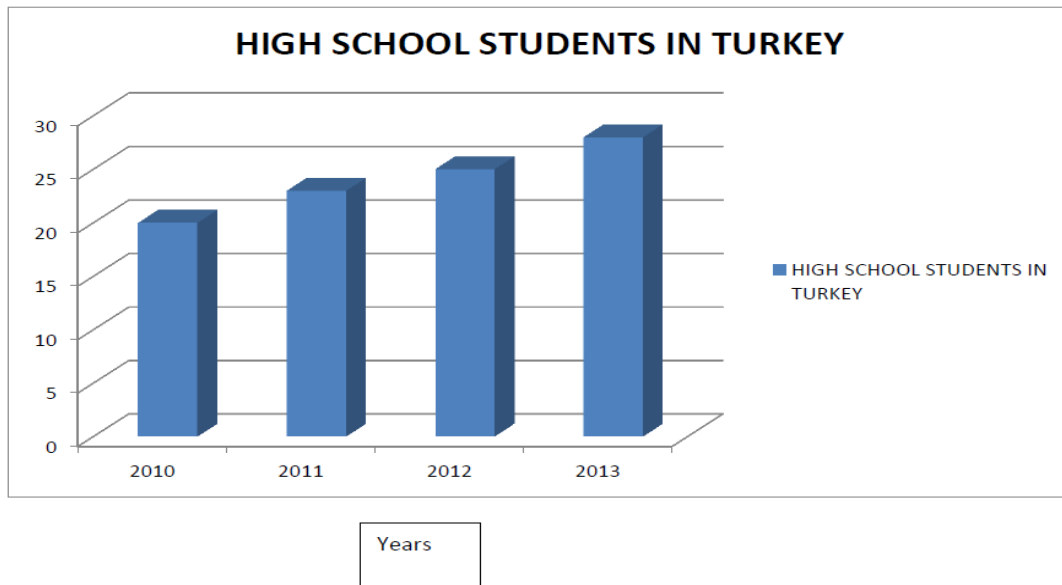
• ADJ to show small change	<ul style="list-style-type: none"> • Slight • Moderate • Minimal • Little • modest
• ADJ to show a regular movement	<ul style="list-style-type: none"> • Gradual • Steady • continuous
• ADJ to show a considerable change	<ul style="list-style-type: none"> • Sharp • Dramatic • Considerable • steep • Abrupt • substantial
• ADJ to show the speed	<ul style="list-style-type: none"> • Slow • Rapid • Sudden

Analyze the graphs and fill in the blanks.



Now (1) _____ you a line graph which I took from an article titled Turkey GDP. The graph shows monthly exports of Turkey in 2014. (2) _____ shows the months while (3) _____ shows the exports in million dollars. When we look at the graph as a whole, we see that exports in Turkey (4) _____ between January and March, and they (5) _____ 30 million dollars in March. Monthly exports (6) _____ until September, and then (7) _____ at 10 million dollars until the end of the year.

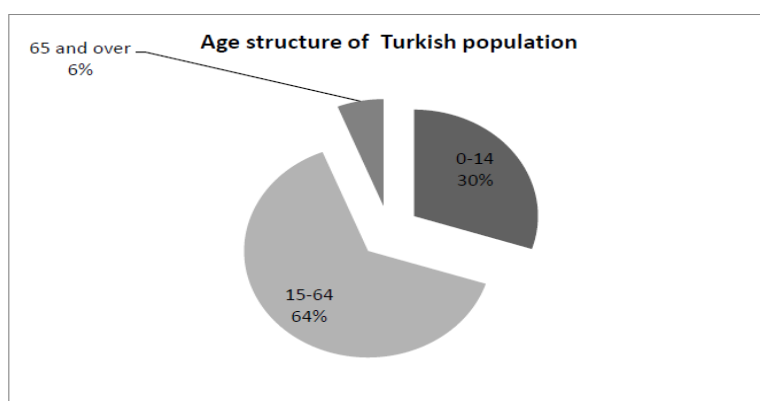
QUESTION 2:



"National Education Statistics". (2015). Retrieved from <http://www.meb.gov.tr/english/minister.html>

Now, let's (1) _____ at a bar graph which I borrowed from National Education Statistics. It shows the number of high school students in Turkey (2) _____ and 2013. (3) _____ shows the number of students in millions while (4) _____ shows the years. Clearly, we can see that there is (5) _____ in the number of students between 2010 and 2013 since the numbers increased from 17 million to (6) _____ million.

QUESTION 3:



Türkiye İstatistik Kurumu. (2015). Retrieved from <http://www.tuik.gov.tr/UstMenu.do?metod=temelist>

Now, I would like to draw your attention to (1) _____ which shows the age structure of Turkish population. I (2) _____ the chart from the website of TÜİK. As we can see in the pie chart, the largest segment of the population shows the people between the ages of (3) _____. Those under 14 make up (4) _____.

_____ of the population, and (5) _____ are only a small percentage of the population.

ANSWER KEY

Graph 1:

Now **(1) let me show** you a line graph which I took from an article titled Turkey GDP. The graph shows monthly exports of Turkey in 2014. **(2) the horizontal axis** shows the months while **(3) the vertical axis** shows the exports in million dollars. When we look at the graph as a whole, we see that exports in Turkey **(4) increased significantly/ increased considerably/ increased dramatically** between January and March, and the **(5) peaked at** 30 million dollars in March. Monthly exports **(6) fluctuated** until September, and then **(7) leveled out/ remained steady/ remained stable/ stayed constant/ maintained the same level/ held constant** at 10 million dollars until the end of the year.

Graph 2:

Now, let's **(1) have a look** at a bar graph which I borrowed from National Education Statistics. It shows the number of high school students in Turkey **(2) between 2010** and 2013 . **(3) The vertical axis** shows the number of students in millions while **(4) the horizontal axis** shows the years. Clearly, we can see that there is **(5) a gradual increase** in the number of students between 2010 and 2013 since the numbers increased **(6)** from 17 million to **more than 25** million.

Graph 3:

Now, I would like to draw your attention to **(1) a pie chart** which shows the age structure of Turkish population. I **(2) borrowed** the chart from the website of TUIK. As we can see in the pie chart, the largest segment of the population shows the people between the ages of **(3) 15 and 64**. Those under 14 make up **(4) 30 percent** of the population, and **(5) those over 65** are only a small percentage of the population.